



Date: 25 /08/2022
GRADE: I







CPE - 02 (2022-23)
MATHEMATICS

Max marks: 20
Time: 1 hour

Name: _____

General Instructions:

1. This question paper contains two parts A and B. Each part is compulsory.

Q.No.	Section A Do as directed.	Mark 6X1=6
I 1	<p>Choose the correct answer for the following questions.</p> <p>1 Tick the object that can slide.</p> <div style="display: flex; justify-content: space-around; align-items: center;"><div style="text-align: center;"> <input type="checkbox"/></div><div style="text-align: center;"> <input type="checkbox"/></div><div style="text-align: center;"> <input type="checkbox"/></div></div>	
2	<p>Circle the picture that is different.</p> <div style="display: flex; justify-content: space-around; align-items: center;"><div style="text-align: center;"></div><div style="text-align: center;"></div><div style="text-align: center;"></div></div>	

3

Tick the picture that has less number of fish in the given bowls.



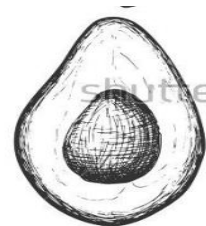
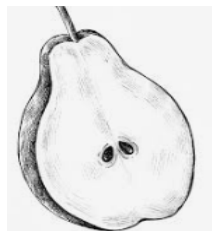
4

Circle the object at the bottom.




5

Tick the part that belong to the first picture.



6

Tick What comes next.




II

Fill in the correct words.

2x1=2

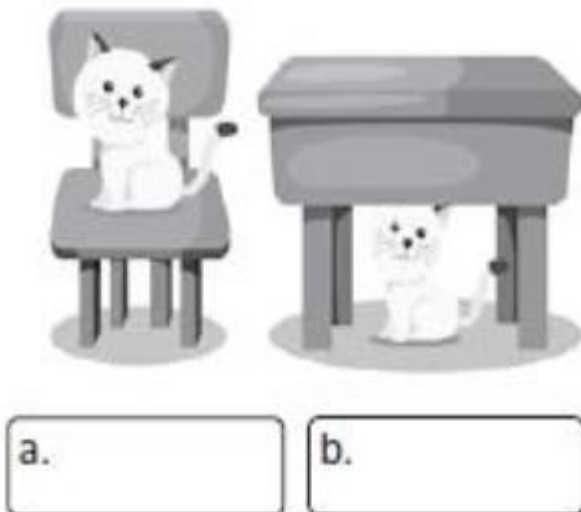
7


Write **near** or **far**.




8

Write **on** or **under**.



<p>III</p> <p>9</p>	<p>State whether the following sentences are true or false.</p> <div style="display: flex; align-items: center;">  <p>Elephants are standing far away from each other.</p> </div> <p>a) True b) False</p>	<p>2X1=2</p>
-----------------------------------	------------------------------------------------------------------------------------------------------------------------------------------------------------------------------------------------------------------------------------------------------------------------------------------------------------------------------------	---------------------

<p>10</p>	<div style="text-align: center;">  </div> <p>The sun is before the tire.</p> <p>a) True b) False</p>	
------------------	-------------------------------------------------------------------------------------------------------------------------------------------------------------------------------------------------------------	--

<p>IV</p>	<p>Section B</p> <p>Answer the following questions.</p>	<p>5X2=10</p>
------------------	-----------------------------------------------------------------------	----------------------

<p>11</p>	<p>Write the numeral that comes after.</p> <p>a. <table border="1" style="display: inline-table; vertical-align: middle;"> <tr> <td style="padding: 5px 10px;">9</td> <td style="width: 50px; height: 40px; vertical-align: middle;">.....</td> </tr> </table></p> <p>b. <table border="1" style="display: inline-table; vertical-align: middle;"> <tr> <td style="padding: 5px 10px;">6</td> <td style="width: 50px; height: 40px; vertical-align: middle;">.....</td> </tr> </table></p>	9	6	
9					
6					

12

Circle the balloon that is near the drum and colour it.



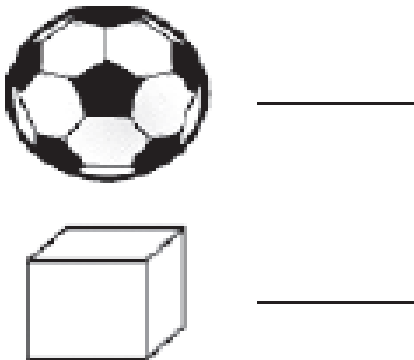
13

Draw the shapes that come next.



14

Write **R** for roll, **S** for slide and **B** for both roll and slide.



15

Colour the bird 'blue' which is inside the nest and colour the bird 'red' which is outside.



THE END